

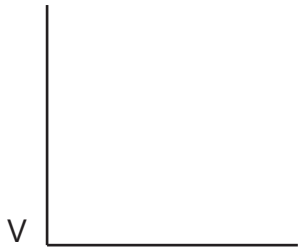
NAME AND SURNAME:  
GROUP: 1º ESO \_\_\_\_\_

**PERPENDICULAR BISECTOR OF A SEGMENT:** DRAW THE PERPENDICULAR BISECTOR OF THESE TWO SEGMENTS.

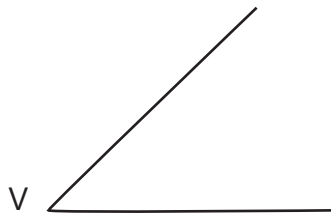
A  B

C  D

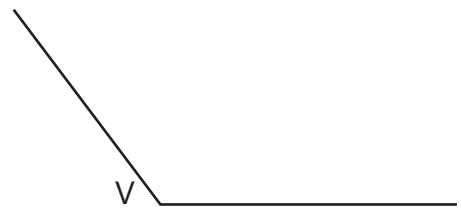
**TYPES OF ANGLES:** WRITE UNDER EACH ANGLE ITS CORRESPONDING NAME.



-----



-----



-----

**BISECTOR OF AN ANGLE:** DRAW THE BISECTOR OF THESE TWO ANGLES

